

FINAL NEET(UG)-2020 EXAMINATION
(Held On Sunday 13th SEPTEMBER, 2020)
CHEMISTRY
TEST PAPER WITH ANSWER

136. Match the following and identify the correct option.

- | | |
|---|---|
| (a) $\text{CO(g)} + \text{H}_2\text{(g)}$ | (i) $\text{Mg(HCO}_3)_2 + \text{Ca(HCO}_3)_2$ |
| (b) Temporary hardness of water | (ii) An electron deficient hydride |
| (c) B_2H_6 | (iii) Synthesis gas |
| (d) H_2O_2 | (iv) Non-planar structure |

- | (a) | (b) | (c) | (d) |
|-----------|-------|------|------|
| (1) (i) | (iii) | (ii) | (iv) |
| (2) (iii) | (i) | (ii) | (iv) |
| (3) (iii) | (ii) | (i) | (iv) |
| (4) (iii) | (iv) | (ii) | (i) |

Ans. (2)

137. A tertiary butyl carbocation is more stable than a secondary butyl carbocation because of which of the following ?

- (1) Hyperconjugation
- (2) -I effect of $-\text{CH}_3$ groups
- (3) +R effect of $-\text{CH}_3$ groups
- (4) -R effect of $-\text{CH}_3$ groups

Ans. (1)

138. What is the change in oxidation number of carbon in the following reaction ?



- (1) 0 to -4
- (2) +4 to +4
- (3) 0 to +4
- (4) -4 to +4

Ans. (4)

139. Sucrose on hydrolysis gives :

- (1) α -D-Fructose + β -D-Fructose
- (2) β -D-Glucose + α -D-Fructose
- (3) α -D-Glucose + β -D-Glucose
- (4) α -D-Glucose + β -D-Fructose

Ans. (4)

140. The calculated spin only magnetic moment of Cr^{2+} ion is :

- (1) 2.84 BM
- (2) 3.87 BM
- (3) 4.90 BM
- (4) 5.92 BM

Ans. (3)

141. Identify a molecule which does not exist.

- (1) O_2
- (2) He_2
- (3) Li_2
- (4) C_2

Ans. (2)

142. Which of the following oxoacid of sulphur has -O-O- linkage ?

- (1) $\text{H}_2\text{S}_2\text{O}_7$, pyrosulphuric acid
- (2) H_2SO_3 , sulphurous acid
- (3) H_2SO_4 , sulphuric acid
- (4) $\text{H}_2\text{S}_2\text{O}_8$, peroxodisulphuric acid

Ans. (4)

143. Which of the following is the correct order of increasing field strength of ligands to form coordination compounds ?

- (1) $\text{CN}^- < \text{C}_2\text{O}_4^{2-} < \text{SCN}^- < \text{F}^-$
- (2) $\text{SCN}^- < \text{F}^- < \text{C}_2\text{O}_4^{2-} < \text{CN}^-$
- (3) $\text{SCN}^- < \text{F}^- < \text{CN}^- < \text{C}_2\text{O}_4^{2-}$
- (4) $\text{F}^- < \text{SCN}^- < \text{C}_2\text{O}_4^{2-} < \text{CN}^-$

Ans. (2)

144. The number of Faradays(F) required to produce 20 g of calcium from molten CaCl_2 (Atomic mass of Ca = 40 g mol⁻¹) is :

- (1) 4
- (2) 1
- (3) 2
- (4) 3

Ans. (2)

145. Reaction between acetone and methylmagnesium chloride followed by hydrolysis will give :

- (1) Isobutyl alcohol
- (2) Isopropyl alcohol
- (3) Sec. butyl alcohol
- (4) Tert. butyl alcohol

Ans. (4)

146. Which of the following is a cationic detergent ?

- (1) Sodium dodecylbenzene sulphonate
- (2) Sodium lauryl sulphate
- (3) Sodium stearate
- (4) Cetyltrimethyl ammonium bromide

Ans. (4)

147. Identify the incorrect statement.

- (1) The oxidation states of chromium in CrO_4^{2-} and $\text{Cr}_2\text{O}_7^{2-}$ are not the same
- (2) Cr^{2+} (d^4) is a stronger reducing agent than Fe^{2+} (d^6) in water.
- (3) The transition metals and their compounds are known for their catalytic activity due to their ability to adopt multiple oxidation states and to form complexes.
- (4) Interstitial compounds are those that are formed when small atoms like H, C or N are trapped inside the crystal lattices of metals.

Ans. (1)

148. Which of the following alkane cannot be made in good yield by Wurtz reaction ?

- (1) n-Butane
- (2) n-Hexane
- (3) 2,3-Dimethylbutane
- (4) n-Heptane

Ans. (4)

149. Urea reacts with water to form A which will decompose to form B. B when passed through Cu^{2+} (aq), deep blue colour solution C is formed. What is the formula of C from the following ?

- (1) $\text{CuCO}_3 \cdot \text{Cu}(\text{OH})_2$
- (2) CuSO_4
- (3) $[\text{Cu}(\text{NH}_3)_4]^{2+}$
- (4) $\text{Cu}(\text{OH})_2$

Ans. (3)

150. The freezing point depression constant (K_f) of benzene is $5.12 \text{ K kg mol}^{-1}$. The freezing point depression for the solution of molality 0.078 m containing a non-electrolyte solute in benzene is (rounded off upto two decimal places) :

- (1) 0.60 K
- (2) 0.20 K
- (3) 0.80 K
- (4) 0.40 K

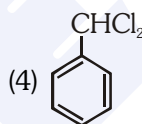
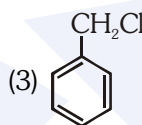
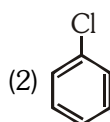
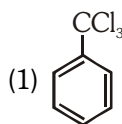
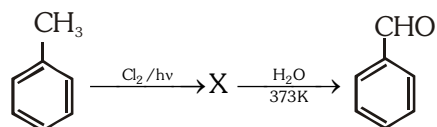
Ans. (4)

151. The number of protons, neutrons and electrons in ${}_{71}^{175}\text{Lu}$, respectively, are :

- (1) 175, 104 and 71
- (2) 71, 104 and 71
- (3) 104, 71 and 71
- (4) 71, 71 and 104

Ans. (2)

152. Identify compound X in the following sequence of reactions :



Ans. (4)

153. Identify the **correct** statement from the following:

- (1) Pig iron can be moulded into a variety of shapes.
- (2) Wrought iron is impure iron with 4% carbon.
- (3) Blister copper has blistered appearance due to evolution of CO_2 .
- (4) Vapour phase refining is carried out for Nickel by Van Arkel method.

Ans. (1)

154. Which of the following set of molecules will have zero dipole moment ?

- (1) Boron trifluoride, beryllium difluoride, carbon dioxide, 1,4-dichlorobenzene
- (2) Ammonia, beryllium difluoride, water, 1,4-dichlorobenzene
- (3) Boron trifluoride, hydrogen fluoride, carbon dioxide, 1,3-dichlorobenzene
- (4) Nitrogen trifluoride, beryllium difluoride, water, 1,3-dichlorobenzene

Ans. (1)

155. Paper chromatography is an example of:

- (1) Column chromatography
- (2) Adsorption chromatography
- (3) Partition chromatography
- (4) Thin layer chromatography

Ans. (3)

156. Identify the **incorrect** match :

Name	IUPAC Official Name
(a) Unnilunium	(i) Mendeleevium
(b) Unniltrium	(ii) Lawrencium
(c) Unnilhexium	(iii) Seaborgium
(d) Unununnium	(iv) Darmstadtium
(1) (d), (iv)	(2) (a), (i)
(3) (b), (ii)	(4) (c), (iii)

Ans. (1)

157. Find out the solubility of $\text{Ni}(\text{OH})_2$ in 0.1M NaOH. Given that the ionic product of $\text{Ni}(\text{OH})_2$ is 2×10^{-15} .

- (1) 1×10^8 M
- (2) 2×10^{-13} M
- (3) 2×10^{-8} M
- (4) 1×10^{-13} M

Ans. (2)

158. Which of the following is a natural polymer ?

- (1) poly (Butadiene-acrylonitrile)
- (2) cis-1,4-polyisoprene
- (3) poly (Butadiene-styrene)
- (4) polybutadiene

Ans. (2)

159. Reaction between benzaldehyde and acetophenone in presence of dilute NaOH is known as :

- (1) Cross Aldol condensation
- (2) Aldol condensation
- (3) Cannizzaro's reaction
- (4) Cross Cannizzaro's reaction

Ans. (1)

160. The mixture which shows positive deviation from Raoult's law is :-

- (1) Chloroethane + Bromoethane
- (2) Ethanol + Acetone
- (3) Benzene + Toluene
- (4) Acetone + Chloroform

Ans. (2)

161. The rate constant for a first order reaction is $4.606 \times 10^{-3} \text{ s}^{-1}$. The time required to reduce 2.0 g of the reactant to 0.2 g is :

- (1) 1000 s
- (2) 100 s
- (3) 200 s
- (4) 500 s

Ans. (4)

162. HCl was passed through a solution of CaCl_2 , MgCl_2 and NaCl. Which of the following compound(s) crystallise(s) ?

- (1) NaCl, MgCl_2 and CaCl_2
- (2) Both MgCl_2 and CaCl_2
- (3) Only NaCl
- (4) Only MgCl_2

Ans. (3)

163. The correct option for free expansion of an ideal gas under adiabatic condition is :

- (1) $q > 0$, $\Delta T > 0$ and $w > 0$
- (2) $q = 0$, $\Delta T = 0$ and $w = 0$
- (3) $q = 0$, $\Delta T < 0$ and $w > 0$
- (4) $q < 0$, $\Delta T = 0$ and $w = 0$

Ans. (2)

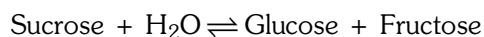
164. Identify the **correct** statements from the following:

- (a) $\text{CO}_2(\text{g})$ is used as refrigerant for ice-cream and frozen food.
- (b) The structure of C_{60} contains twelve six carbon rings and twenty five carbon rings.
- (c) ZSM-5, a type of zeolite, is used to convert alcohols into gasoline.
- (d) CO is colorless and odourless gas.

- (1) (c) and (d) only
- (2) (a) and (b) and (c) only
- (3) (a) and (c) only
- (4) (b) and (c) only

Ans. (1)

165. Hydrolysis of sucrose is given by the following reaction.

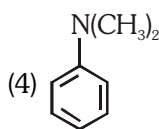
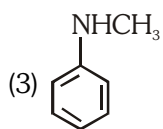
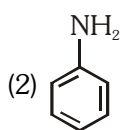
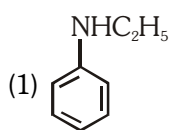


If the equilibrium constant (K_c) is 2×10^{13} at 300K, the value of $\Delta_r G^\ominus$ at the same temperature will be:

- (1) $-8.314 \text{ J mol}^{-1} \text{ K}^{-1} \times 300 \text{ K} \times \ln(4 \times 10^{13})$
- (2) $-8.314 \text{ J mol}^{-1} \text{ K}^{-1} \times 300 \text{ K} \times \ln(2 \times 10^{13})$
- (3) $8.314 \text{ J mol}^{-1} \text{ K}^{-1} \times 300 \text{ K} \times \ln(2 \times 10^{13})$
- (4) $8.314 \text{ J mol}^{-1} \text{ K}^{-1} \times 300 \text{ K} \times \ln(3 \times 10^{13})$

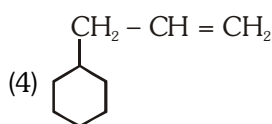
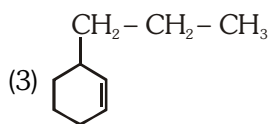
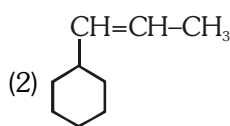
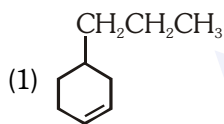
Ans. (2)

166. Which of the following amine will give the carbylamine test?



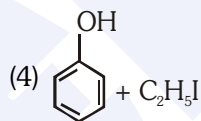
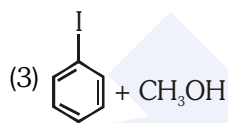
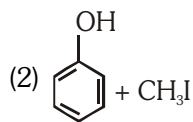
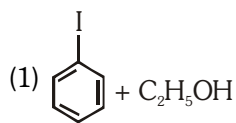
Ans. (2)

167. An alkene on ozonolysis gives methanal as one of the product. Its structure is :



Ans. (4)

168. Anisole on cleavage with HI gives:



Ans. (2)

169. Elimination reaction of 2-Bromo-pentane to form pent-2-ene is:

- (a) β -Elimination reaction
- (b) Follow Zaitsev rule
- (c) Dehydrohalogenation reaction
- (d) Dehydration reaction

(1) (a), (b), (d)

(2) (a), (b), (c)

(3) (a), (c), (d)

(4) (b), (c), (d)

Ans. (2)

170. An increase in the concentration of the reactants of a reaction leads to change in :

- (1) collision frequency
- (2) activation energy
- (3) heat of reaction
- (4) threshold energy

Ans. (1)

171. Which of the following is a basic amino acid :

- (1) Lysine
- (2) Serine
- (3) Alanine
- (4) Tyrosine

Ans. (1)

172. The following metal ion activates many enzymes, participates in the oxidation of glucose to produce ATP and with Na, is responsible for the transmission of nerve signals.

- (1) Potassium
- (2) Iron
- (3) Copper
- (4) Calcium

Ans. (1)

173. For the reaction $2\text{Cl(g)} \rightarrow \text{Cl}_2\text{(g)}$, the correct option is:

- (1) $\Delta_r H < 0$ and $\Delta_r S < 0$
- (2) $\Delta_r H > 0$ and $\Delta_r S > 0$
- (3) $\Delta_r H > 0$ and $\Delta_r S < 0$
- (4) $\Delta_r H < 0$ and $\Delta_r S > 0$

Ans. (1)

174. Match the following :

Oxide	Nature
(a) CO	(i) Basic
(b) BaO	(ii) Neutral
(c) Al_2O_3	(iii) Acidic
(d) Cl_2O_7	(iv) Amphoteric

Which of the following is correct option?

(a)	(b)	(c)	(d)
(1) (iv)	(iii)	(ii)	(i)
(2) (i)	(ii)	(iii)	(iv)
(3) (ii)	(i)	(iv)	(iii)
(4) (iii)	(iv)	(i)	(ii)

Ans. (3)

175. Measuring Zeta potential is useful in determining which property of colloidal solution?

- (1) Size of the colloidal particles
- (2) Viscosity
- (3) Solubility
- (4) Stability of the colloidal particles

Ans. (4)

176. A mixture of N_2 and Ar gases in a cylinder contains 7g of N_2 and 8g of Ar. If the total pressure of the mixture of gases in the cylinder is 27 bar, the partial pressure of N_2 is:

[Use atomic masses (in g mol^{-1}) : N = 14, Ar = 40]

- (1) 18 bar
- (2) 9 bar
- (3) 12 bar
- (4) 15 bar

Ans. (4)

177. Which of the following is not correct about carbon monoxide?

- (1) It is produced due to incomplete combustion
- (2) It forms carboxyhaemoglobin
- (3) It reduce oxygen carrying ability of blood
- (4) The carboxyhaemoglobin (haemoglobin bound to CO) is less stable than oxyhaemoglobin.

Ans. (4)

178. An element has a body centered cubic (bcc) structure with a cell edge of 288 pm. The atomic radius is :

- (1) $\frac{4}{\sqrt{2}} \times 288 \text{ pm}$
- (2) $\frac{\sqrt{3}}{4} \times 288 \text{ pm}$
- (3) $\frac{\sqrt{2}}{4} \times 288 \text{ pm}$
- (4) $\frac{4}{\sqrt{3}} \times 288 \text{ pm}$

Ans. (2)

179. Which one of the following has maximum number of atoms?

- (1) 1g of Li(s) [Atomic mass of Li = 7]
- (2) 1g of Ag(s) [Atomic mass of Ag = 108]
- (3) 1g of Mg(s) [Atomic mass of Mg = 24]
- (4) 1g of $\text{O}_2\text{(g)}$ [Atomic mass of O = 16]

Ans. (1)

180. On electrolysis of dil. sulphuric acid using Platinum (Pt) electrode, the product obtained at anode will be:

- (1) SO_2 gas
- (2) Hydrogen gas
- (3) Oxygen gas
- (4) H_2S gas

Ans. (3)

Assure your Success in
NEET (UG)

with

ALLEN[®]
Digital Classes
Study Online from Home



1
AIR

NEET 2019
NALIN
KHANDELWAL
Classroom Student

*Class 12th Appeared/
Pass Students*

Leader Batch

15th Sept.

*Ex-ALLEN / 12th Pass
in 2019 or before*

Achiever Batch

16th Sept.

Apply at www.allen.ac.in

Direct Admission